



Name: _____ Class: _____

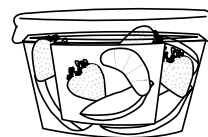
Sten is going shopping to buy items to take to school for his lunch.



cheese sticks - £3.00



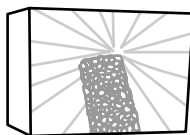
crackers - £1.25




fruit pot - £2.50



applesauce - £1.50



cereal bars - £2.00



vegetables with dip - £1.75

1 What three things can he buy for exactly £5.00?

2 What four items can he buy for exactly £6.50?

3 What two items can he buy for exactly £4.00?

4 What two items can he buy for exactly £3.00?

5 Sten has £6.00. He needs to pick three items for his lunch. What two different combinations of three items can he buy for exactly £6.00?

