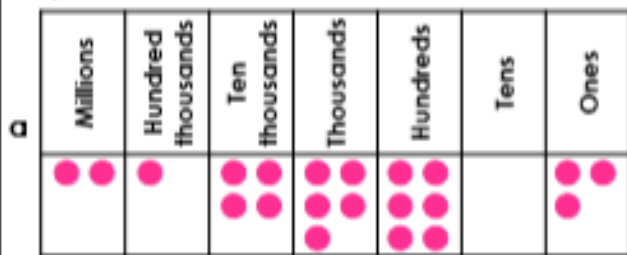


## Rounding Numbers

1a. Which two numbers will round to the same value when rounded to the nearest 10,000?



b 2,158,011


c Two million, one hundred and fifty-one thousand, nine hundred



VP

## Rounding Numbers

1b. Which two numbers will round to the same value when rounded to the nearest 100,000?



b 5,663,120

c Five million, seven hundred and nineteen thousand, six hundred



VP

2a. Which numbers round to 2,000,000 when rounding to the nearest 1,000,000?

2,565,705

1,625,900

Two million, three hundred and fifty-five thousand, eight hundred and five



VP

2b. Which numbers round to 4,500,000 when rounding to the nearest 100,000?

4,712,805

4,465,715

Four million, five hundred and two thousand, five hundred and thirty



VP

3a. Tick to show whether the number rounds to 2,900,000 or 3,000,000 to the nearest 100,000.

Number	Rounds to 2,900,000	Rounds to 3,000,000
2,858,790		
3,015,830		
2,945,745		



VP

3b. Tick to show whether the number rounds to 4,900,000 or 5,000,000 to the nearest 10,000.

Number	Rounds to 4,900,000	Rounds to 5,000,000
4,896,344		
4,995,051		
5,003,688		



VP

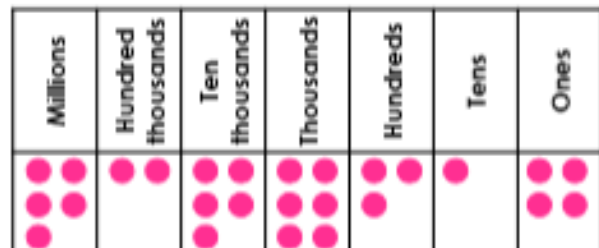
4a. Round the number below to the nearest 10,000, 100,000 and 1,000,000.

Two million, seven hundred and five thousand, six hundred and fifty-four.



VP

4b. Round the number below to the nearest 10,000, 100,000 and 1,000,000.



VP