

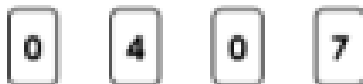
Fractions to Decimals 1

Fractions to Decimals 1

1a. Use the digit cards to complete the statements.

$$\frac{40}{100} \text{ is equivalent to } 0.\boxed{}$$

$$\frac{7}{10} \text{ is equivalent to } 0.\boxed{}$$

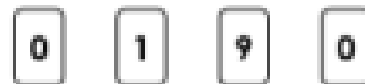


✓

1b. Use the digit cards to complete the statements.

$$\frac{1}{10} \text{ is equivalent to } 0.\boxed{}$$

$$\frac{9}{100} \text{ is equivalent to } 0.\boxed{}9$$



✓

2a. True or false?

$$0.5 \text{ is equivalent to } \frac{50}{100}.$$



✓


2b. True or false?

$$0.7 \text{ is equivalent to } \frac{7}{100}.$$




✓

3a. Convert the fractions below to decimals.



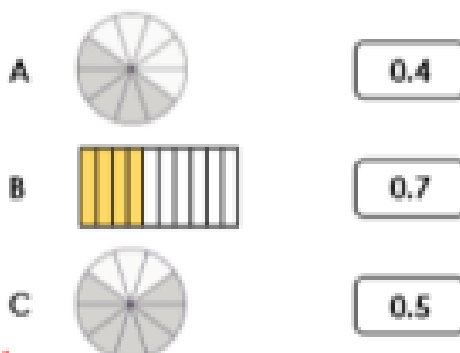
✓

3b. Convert the fractions below to decimals.



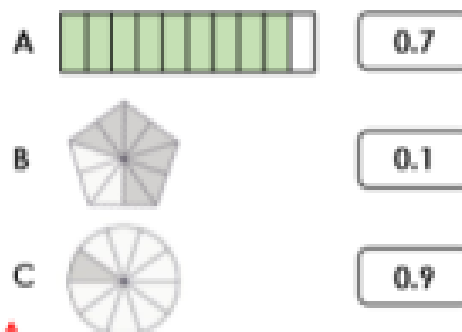
✓

4a. Match the decimals to the equivalent image.



✓

4b. Match the decimals to the equivalent image.



✓