

Fractions to Decimals 1

Fractions to Decimals 1

1a. Use the digit cards to complete the statements.

$\frac{30}{40}$ is equivalent to $0.\square 5$

$\frac{3}{100}$ is equivalent to $0.\square\square$

3 0 7 3 0



✓

1b. Use the digit cards to complete the statements.

$\frac{3}{5}$ is equivalent to $0.\square$

$\frac{47}{100}$ is equivalent to $0.\square\square$

0 6 7 4 5



✓

2a. True or false?

0.07 is equivalent to $\frac{70}{100}$.



✓


2b. True or false?

0.65 is equivalent to $\frac{65}{100}$.




✓

3a. Convert the fractions below to decimals.



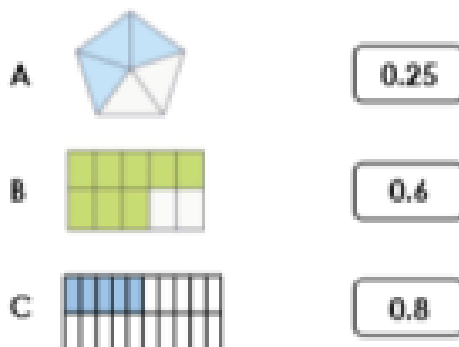
✓

3b. Convert the fractions below to decimals.



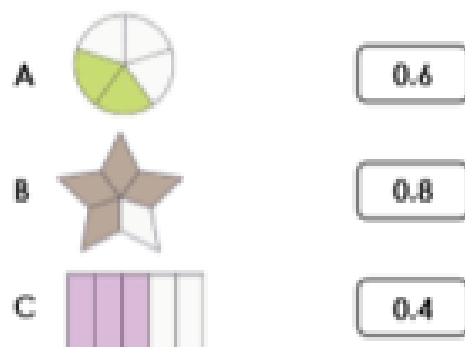
✓

4a. Match the decimals to the equivalent image.



✓

4b. Match the decimals to the equivalent image.



✓