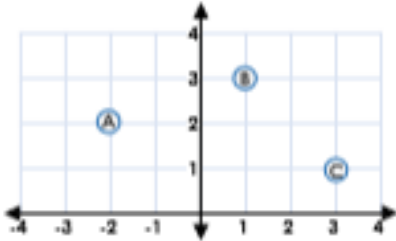


## Four Quadrants

1a. Match coordinates with the points on the grid.



(1, 3)

(3, 1)

(-2, 2)

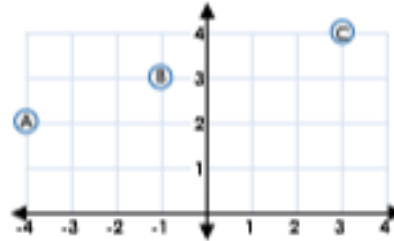
(-3, 2)



VF

## Four Quadrants

1b. Match coordinates with the points on the grid.



(-4, 2)

(3, 4)

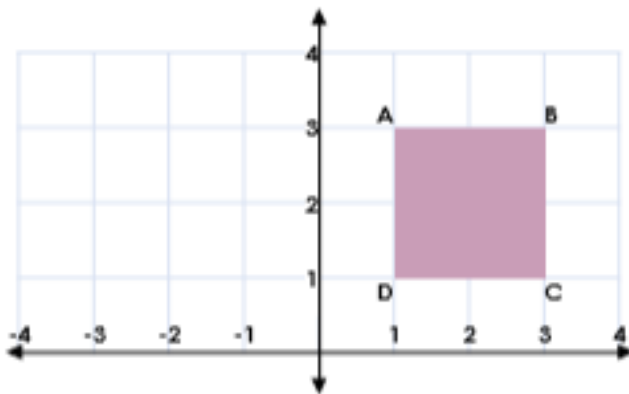
(-1, 3)

(0, 4)



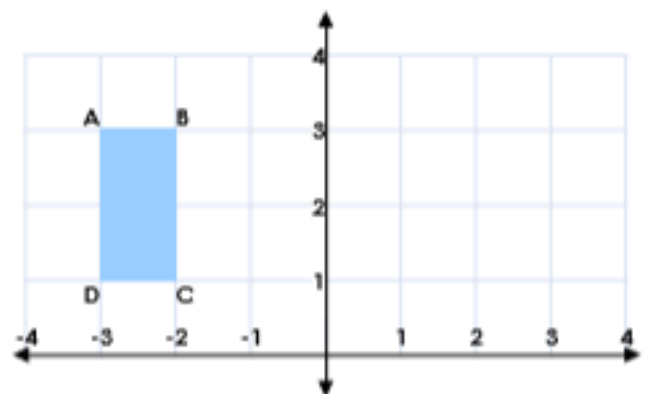
VF

2a. Write the coordinates of the shape.



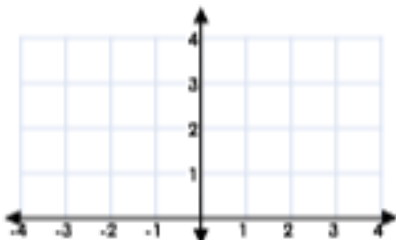
VF

2b. Write the coordinates of the shape.



VF

3a. Plot the coordinates to draw the shape. What shape have you drawn?



(-1, 1)

(-4, 1)

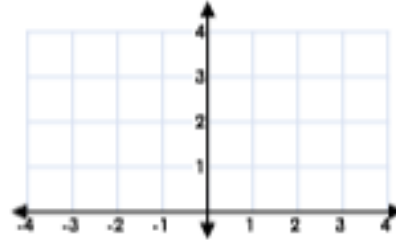
(-4, 3)

(-1, 3)



VF

3b. Plot the coordinates to draw the shape. What shape have you drawn?



(1, 1)

(4, 1)

(1, 4)

(4, 4)



VF