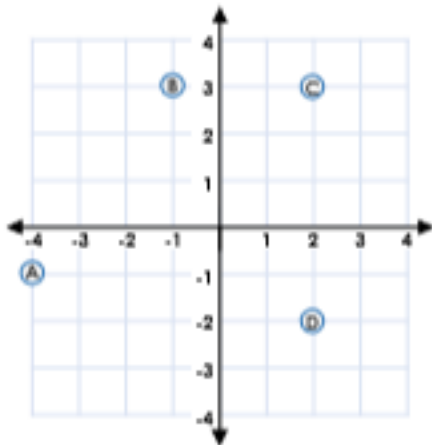


Four Quadrants

Four Quadrants

1a. Match coordinates with the points on the grid.



(2, 3)

(2, -2)

(-1, 3)

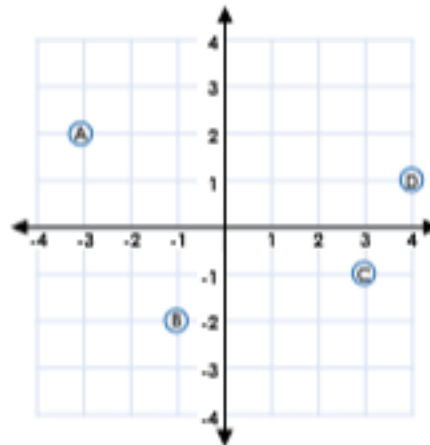
(-4, -1)

(0, -3)



VF

1b. Match coordinates with the points on the grid.



(-1, -2)

(3, -1)

(4, 1)

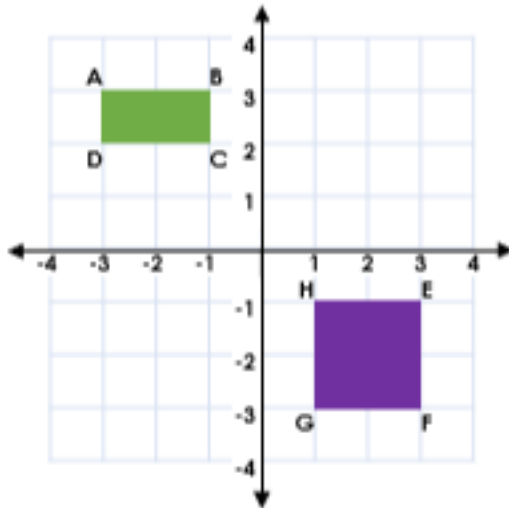
(-3, 2)

(-2, 4)



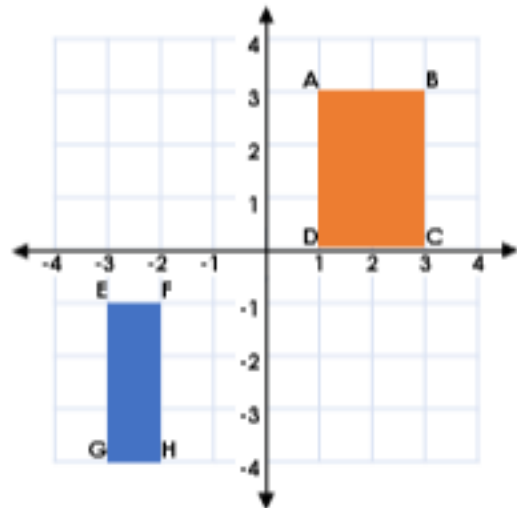
VF

2a. Write the coordinates of each shape.



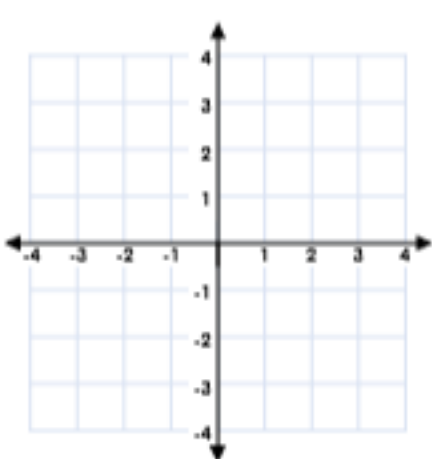
VF

2b. Write the coordinates of each shape.



VF

3a. Plot the coordinates to draw the shapes. What shapes have you drawn?



(0, 1)

(-4, 1)

(-3, 3)

(-1, 3)

(1, -1)

(4, -1)

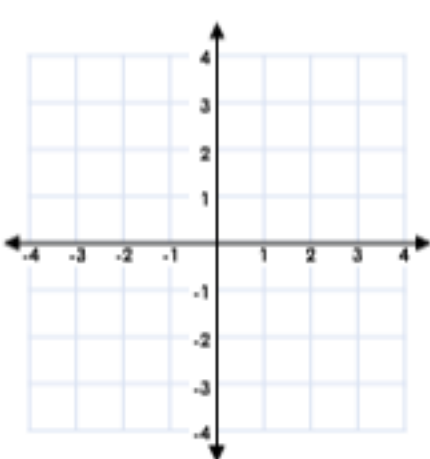
(0, -3)

(3, -3)



VF

3b. Plot the coordinates to draw the shapes. What shapes have you drawn?



(0, 2)

(1, 1)

(1, 3)

(4, 2)

(-3, -1)

(-2, -4)

(-1, -1)

(-2, -2)



VF