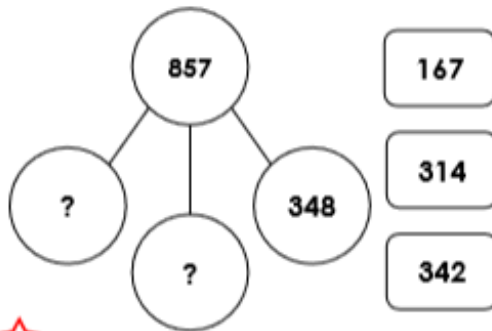


## Multi-Step Problems

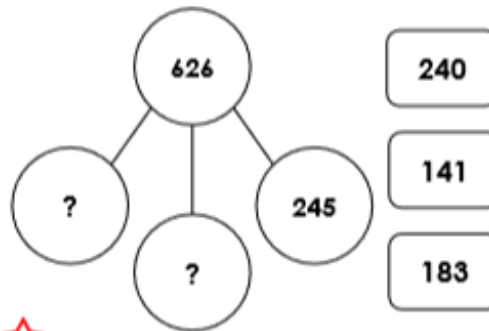
1a. Use the cards to complete the part whole model.



VF


## Multi-Step Problems

1b. Use the cards to complete the part whole model.




VF

2a. Complete the bar model.



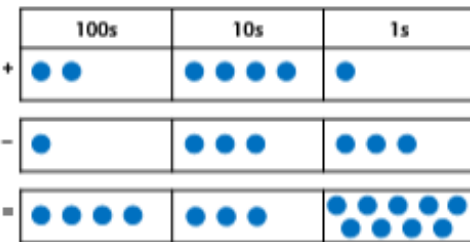
VF

2b. Complete the bar model.



VF

3a. Ben thinks of a number. He adds and subtracts the following numbers:




What number did he start with?



VF

3b. Kate thinks of a number. She adds and subtracts the following numbers:

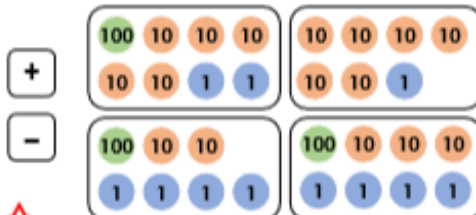


What number did she start with?



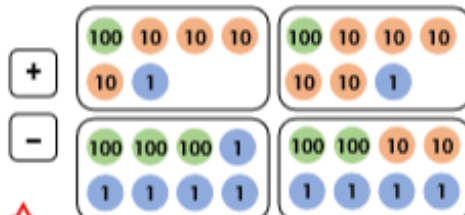
VF

4a. Which of the following cards create a two-step calculation that gives 89 as the answer?



VF

4b. Which of the following cards create a two-step calculation that gives 222 as the answer?



VF