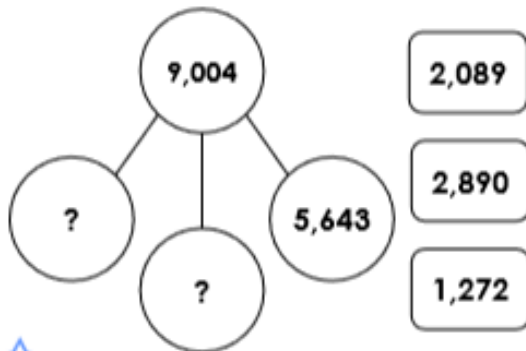


Multi-Step Problems

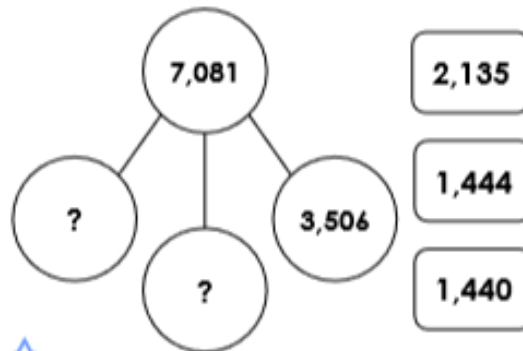
1a. Use the cards to complete the part whole model.



VP


Multi-Step Problems

1b. Use the cards to complete the part whole model.



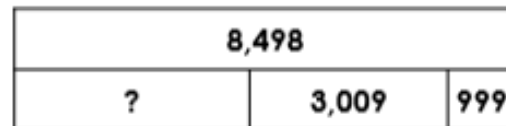
VP

2a. Complete the bar model.



VP

2b. Complete the bar model.



VP

3a. Tony thinks of a number.

After he adds 6,424 and subtracts 2,825, his number is 5,095.



What number did he start with?



VP

3b. Alycia thinks of a number.

After she subtracts 3,724 and adds 2,999, her number is 4,526.



What number did she start with?




VP

4a. Which of the following cards create a two-step calculation that gives 6,184 as the answer?



VP

4b. Which of the following cards create a two-step calculation that gives 2,875 as the answer?



VP