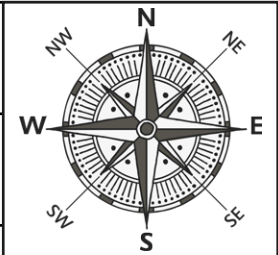


# Compass Directions



		bakery 		mosque 	
church 		park 		hospital 	
	taxi rank 		post box 		café 
fire station 		toy shop 		airport 	
	school 		vets 	pool 	
fair 		police station 			beach 
bus stop 		dentist 	START 	supermarket 	



1. From the start go north 4 squares. Where are you now?

2. From there, go north east 1 square. Where are you now?

3. From there, go south 2 squares. Where are you now?

4. From there, go west 4 squares. Where are you now?

5. From there, go south east 2 squares. Where are you now?

6. Start at the school. How do you get to the fair?

7. Direct someone from the fair to the hospital.

8. Write directions from somewhere on the map to another place.

# Compass Directions - Answers



		bakery 			mosque 	
church 		park 		hospital 		
	taxi rank 		post box 			café 
fire station 		toy shop 		airport 		
	school 		vets 		pool 	
fair 		police station 				beach 
bus stop 		dentist 	START 		supermarket 	

1. From the start go north 4 squares. Where are you now?

At the post box.

2. From there, go north east 1 square. Where are you now?

At the hospital.

3. From there, go south 2 squares. Where are you now?

At the airport.

4. From there, go west 4 squares. Where are you now?

At the fire station.

5. From there, go south east 2 squares. Where are you now?

At the police station.

6. Start at the school. How do you get to the fair?

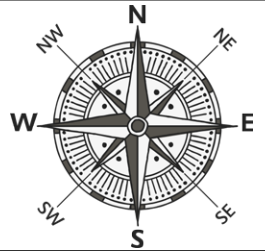
1 square south west.

7. Direct someone from the fair to the hospital.

4 squares north east.

8. Write directions from somewhere on the map to another place.

Each child's answer will differ.

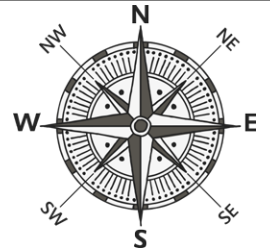


# Compass Directions
























		bakery 		mosque 	
church 		park 		hospital 	
	taxi rank 		post box 		café 
fire station 		toy shop 		airport 	
	school 		vets 	pool 	
fair 		police station 			beach 
bus stop 		dentist 	START 	supermarket 	

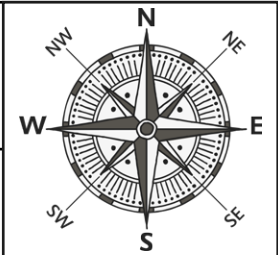
- From the start go north 4 squares and west 2 squares. Where are you now?
- From there, go north east 1 square and east 2 squares. Where are you now?
- From there, go south 2 squares and south east 2 squares. Where are you now?
- From there, go west 4 squares and south 1 square. Where are you now?
- From there, go north west 1 square and west 1 square. Where are you now?
- Start at the supermarket. How do you get to the church?
- Direct someone from the pool to the park.
- Write directions from somewhere on the map to another place.



# Compass Directions - Answers



		bakery 		mosque 	
church 		park 		hospital 	
	taxi rank 		post box 		café 
fire station 		toy shop 		airport 	
	school 		vets 	pool 	
fair 		police station 			beach 
bus stop 		dentist 	START 	supermarket 	



- From the start go north 4 squares and west 2 squares.  
Where are you now?  
At the taxi rank.
- From there, go north east 1 square and east 2 squares.  
Where are you now?  
At the hospital.
- From there, go south 2 squares and south east 2 squares.  
Where are you now?  
At the beach.
- From there, go west 4 squares and south 1 square. Where are you now?  
At the dentist.
- From there, go north west 1 square and west 1 square. Where are you now?  
At the fair.
- Start at the supermarket. How do you get to the church?  
5 squares north west.
- Direct someone from the pool to the park.  
3 squares north west.
- Write directions from somewhere on the map to another place.  
Each child's answer will differ.

# Compass Directions



		bakery 		mosque 	
church 		park 		hospital 	
	taxi rank 		post box 		café 
fire station 		toy shop 		airport 	
	school 		vets 	pool 	
fair 		police station 			beach 
bus stop 		dentist 	START 	supermarket 	

Describe the directions you would go throughout this journey:

Start to the dentist:

Dentist to the cafe:

Cafe to the mosque:

Mosque to the post box:

Post box to the park:

Park to the toy shop:

Toy shop to the airport:

Airport to the beach:

Beach to the start:



Draw diagrams to show how you found out the answers to these questions:



1. Swindon is west of London. Portsmouth is south of Swindon.  
What direction is Portsmouth from London?

2. Lincoln is east of Chester. Blackpool is north of Chester.  
What direction is Blackpool from Lincoln?

3. Sheffield is south of Leeds. Harrogate is north of Sheffield.  
What direction is Harrogate from Leeds?

4. Cardiff is west of London. London is east of Bristol.  
What direction is Cardiff from Bristol?

5. Leeds is south of Newcastle. Hull is east of Leeds.  
What direction is Hull from Newcastle?

# Compass Directions - Answers

		bakery 			mosque 	
church 		park 		hospital 		
	taxi rank 		post box 			café 
fire station 		toy shop 		airport 		
	school 		vets 		pool 	
fair 		police station 				beach 
bus stop 		dentist 	START 		supermarket 	

Describe the directions you would go throughout this journey:

Start to the dentist: 1 square west.

Dentist to the cafe: 4 squares north east.

Cafe to the mosque: 1 square north west, 1 square north.

Mosque to the post box: 2 squares south west.

Post box to the park: 1 square north west.

Park to the toy shop: 2 squares south.

Toy shop to the airport: 2 squares east.

Airport to the beach: 2 squares south east.

Beach to the start: 1 square south west, 2 squares west.





Draw diagrams to show how you can find out the answers to these questions:



1. Swindon is west of London. Portsmouth is south of Swindon.  
What direction is Portsmouth from London?

South west

2. Lincoln is east of Chester. Blackpool is north of Chester.  
What direction is Blackpool from Lincoln?

North west

3. Sheffield is south of Leeds. Harrogate is north of Sheffield.  
What direction is Harrogate from Leeds?

North

4. Cardiff is west of London. London is east of Bristol.  
What direction is Cardiff from Bristol?

West

5. Leeds is south of Newcastle. Hull is east of Leeds.  
What direction is Hull from Newcastle?

South east