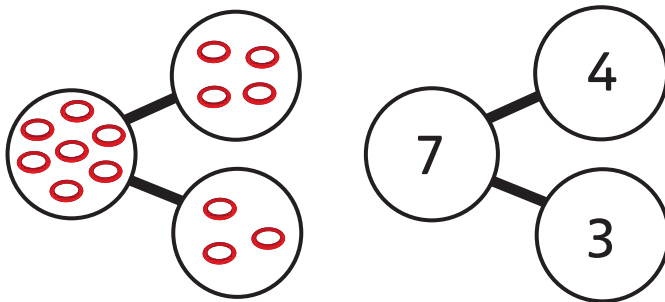



Think together

- 1 Leon throws 7 rings.
He scores 4. How many miss?

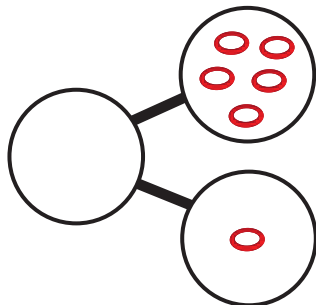
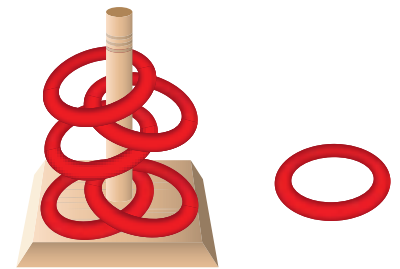


$$7 - 4 = \square$$

$$\square = 7 - 4$$

\square rings miss.

- 2 How many rings are there in total?
Find the number sentences to show this fact.



$$\square + \square = \square$$


$$\square + \square = \square$$

$$\square - \square = \square$$

$$\square - \square = \square$$

CHALLENGE

3 Find all the number sentences.



$$9 = \square + 5$$

$$4 + \square = 9$$

$$9 = 5 + \square$$

$$\square + \square = 9$$

$$5 = \square - \square$$

$$\square - \square = 5$$



I can write the same fact in different ways.

