


Count in 2s, 5s and 10s

Sheet 3

Draw the following jumps on the number lines. Record as a multiplication sentence.


4 jumps of 2

$$4 \times 2 = \square$$



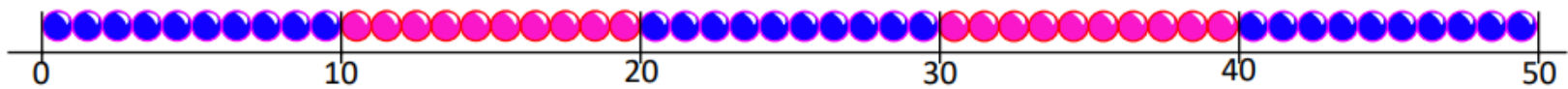
6 lots of 2

$$6 \times 2 = \square$$



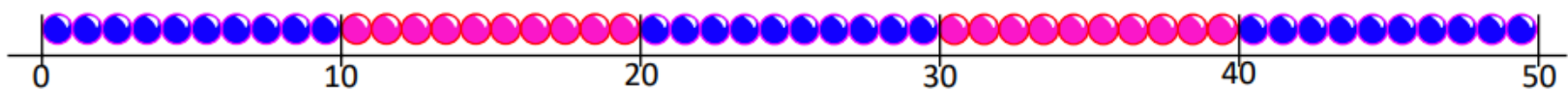
3 jumps of 5

$$3 \times \square = \square$$



5 lots of 5

$$\square \times \square = \square$$




Count in 5s and 10s

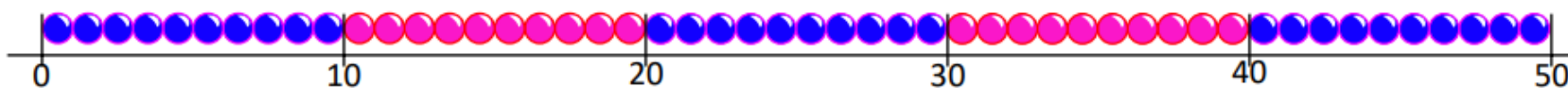
Sheet 2

Draw the following jumps on the number lines:

4 lots of 5



6 jumps of 5



3 lots of 5

