


### Section 1

What number is 8 less than 15?




### Section 2

What time is on the clock?



### Section 3

Add the coins.



### Section 4

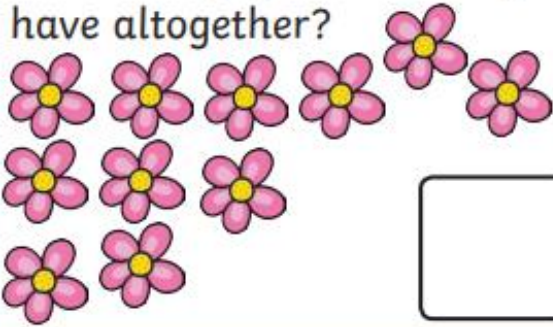
What is the underlined digit worth?

24

### Section 5

Draw 4 more flowers.

How many flowers do you have altogether?




### Section 6

If  $17 = 10 + 7$ , what is  $27$ ?

### Section 7

Tick the smallest bear.



### Section 8

$$12 + \square = 19$$

