

### Section 1

Put the numbers in order, starting with the lowest.

**11 6 5 8**

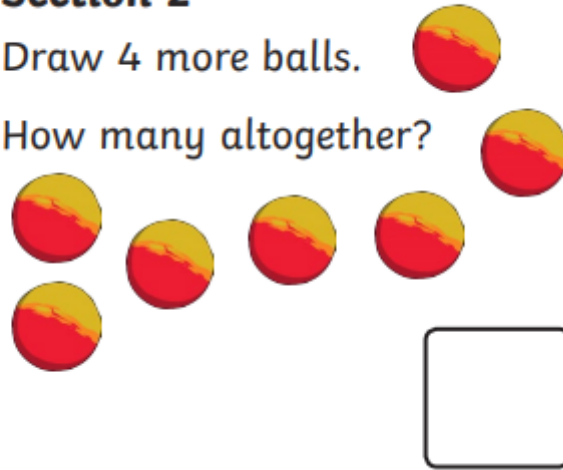
<input type="text"/>	<input type="text"/>	<input type="text"/>	<input type="text"/>
----------------------	----------------------	----------------------	----------------------



### Section 2

Draw 4 more balls.

How many altogether?



### Section 3

$$8 + 2 = \square$$

$$7 - 5 = \square$$

$$5 + 6 = \square$$

### Section 4


Nina eats 6 sweets. How many sweets are left?



### Section 5

Group the cookies in twos.

How many groups are there?



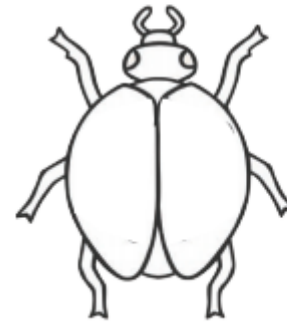
### Section 6

Tick the coins which add to 11p.



### Section 7

Draw 8 spots onto the ladybird. An equal number on each side.



### Section 8

Fill in the missing number.

12, 14, , 18, 20

